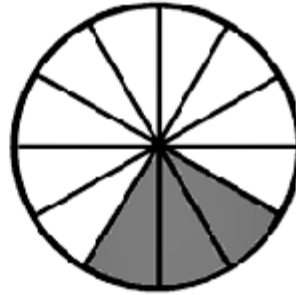


WRITING FRACTIONS

Write the fraction that equals the part that is shaded.




—



—



—

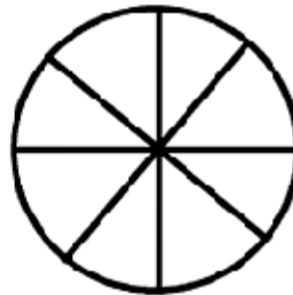


—

Follow the directions for each:



Color two thirds of the circle.



Color six eighths of the circle.



Color one half of the diamond.



Color three fourths of the triangle.