

Name _____

..... **Zero in on the Order**



Write the sums.

1. 0
 $+ 8$

2. 8
 $+ 0$

3. 4
 $+ 6$

4. 6
 $+ 4$

5. 9
 $+ 1$

6. 1
 $+ 9$

7. 5
 $+ 3$

8. 3
 $+ 5$

9. 7
 $+ 3$

10. 0
 $+ 5$

11. 2
 $+ 6$

12. 8
 $+ 2$

13. 6
 $+ 0$

14. 4
 $+ 3$

15. 3
 $+ 6$


16. 0
 $+ 4$

17. 5
 $+ 4$

18. 9
 $+ 0$

19. 3
 $+ 4$

20. 5
 $+ 2$

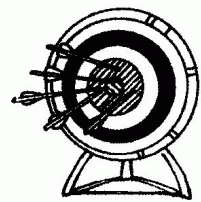



Real World Connection

Tell a story. Write two addition sentences.

21. _____ + _____ = _____

_____ + _____ = _____



_____ arrows