


Name : _____


Subtracting up to 10

Subtract and write the correct number in the box

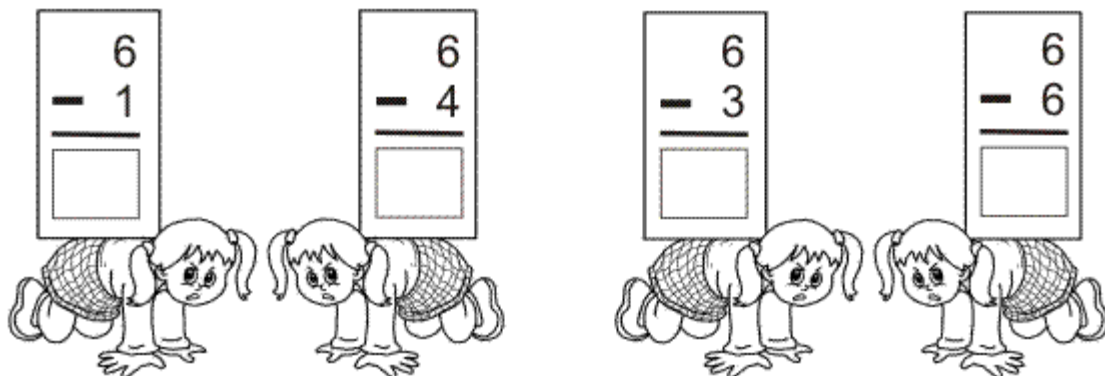
| | | | |
|---|---|---|---|
| $\begin{array}{r} 4 \\ - 3 \\ \hline \square \end{array}$ | $\begin{array}{r} 6 \\ - 5 \\ \hline \square \end{array}$ | $\begin{array}{r} 6 \\ - 0 \\ \hline \square \end{array}$ | $\begin{array}{r} 7 \\ - 2 \\ \hline \square \end{array}$ |
|---|---|---|---|



| | | | |
|---|---|---|---|
| $\begin{array}{r} 7 \\ - 7 \\ \hline \square \end{array}$ | $\begin{array}{r} 7 \\ - 3 \\ \hline \square \end{array}$ | $\begin{array}{r} 4 \\ - 1 \\ \hline \square \end{array}$ | $\begin{array}{r} 7 \\ - 0 \\ \hline \square \end{array}$ |
|---|---|---|---|



| | | | |
|---|---|---|---|
| $\begin{array}{r} 6 \\ - 1 \\ \hline \square \end{array}$ | $\begin{array}{r} 6 \\ - 4 \\ \hline \square \end{array}$ | $\begin{array}{r} 6 \\ - 3 \\ \hline \square \end{array}$ | $\begin{array}{r} 6 \\ - 6 \\ \hline \square \end{array}$ |
|---|---|---|---|



Copyright © 2011. www.kids-theme.com. All right reserved